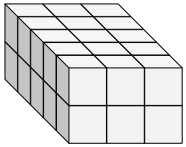


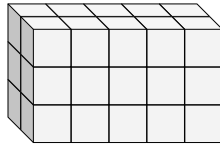


Find the length, width and height of the rectangular prism. Then find the volume.

Ex)



1)



Answers

Ex. 5 3 2 30

1. \_\_\_\_\_

2. \_\_\_\_\_

3. \_\_\_\_\_

4. \_\_\_\_\_

5. \_\_\_\_\_

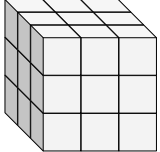
6. \_\_\_\_\_

7. \_\_\_\_\_

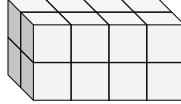
8. \_\_\_\_\_

9. \_\_\_\_\_

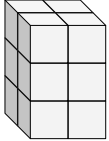
2)



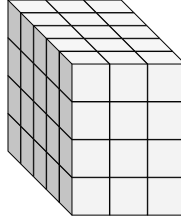
3)



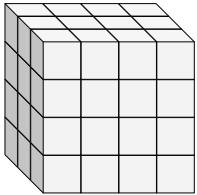
4)



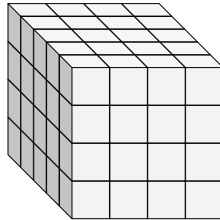
5)



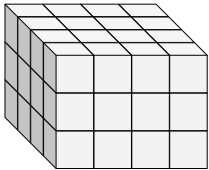
6)



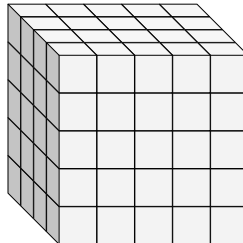
7)



8)

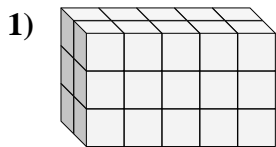
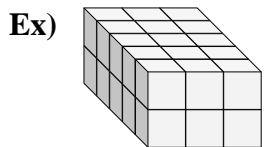


9)





Find the length, width and height of the rectangular prism. Then find the volume.



Answers  
Ex. 5 3 2 30

1. 2 5 3 30

2. 3 3 3 27

3. 2 4 2 16

4. 2 2 3 12

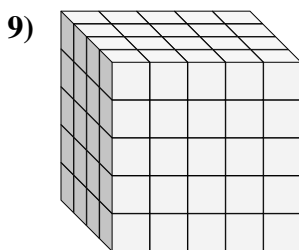
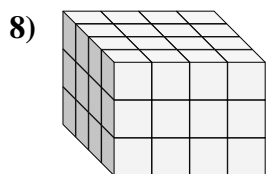
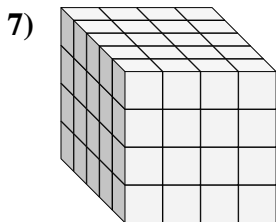
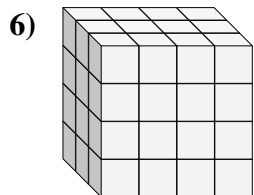
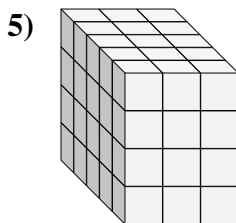
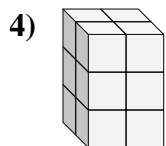
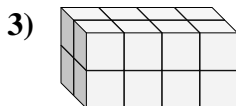
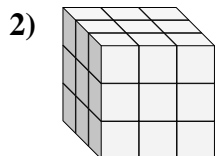
5. 5 3 4 60

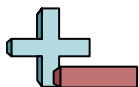
6. 3 4 4 48

7. 5 4 4 80

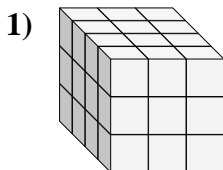
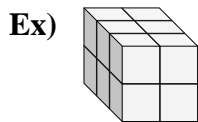
8. 4 4 3 48

9. 4 5 5 100





Find the length, width and height of the rectangular prism. Then find the volume.



Answers  
Ex. 3 2 2 12

1. \_\_\_\_\_

2. \_\_\_\_\_

3. \_\_\_\_\_

4. \_\_\_\_\_

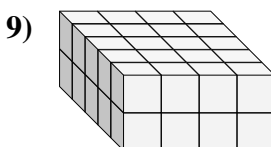
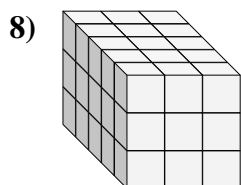
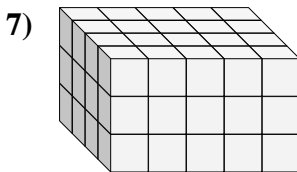
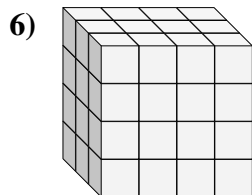
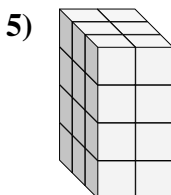
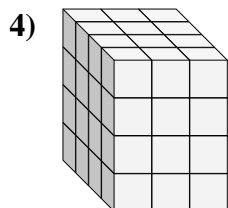
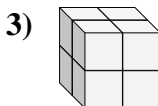
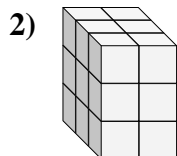
5. \_\_\_\_\_

6. \_\_\_\_\_

7. \_\_\_\_\_

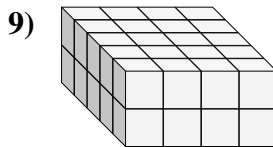
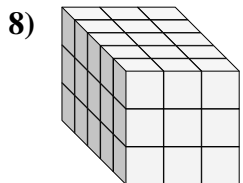
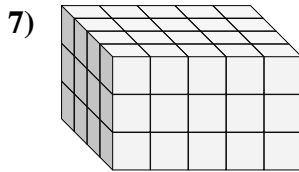
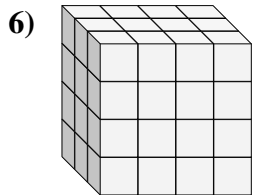
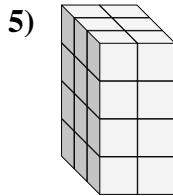
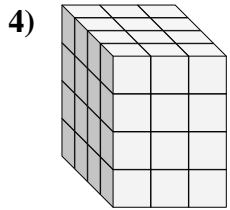
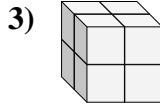
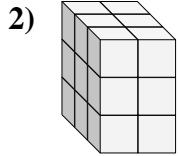
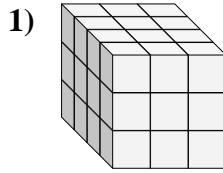
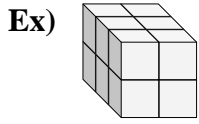
8. \_\_\_\_\_

9. \_\_\_\_\_





Find the length, width and height of the rectangular prism. Then find the volume.



Answers

Ex. 3 2 2 12

1. 4 3 3 36

2. 3 2 3 18

3. 2 2 2 8

4. 4 3 4 48

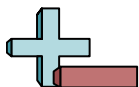
5. 3 2 4 24

6. 3 4 4 48

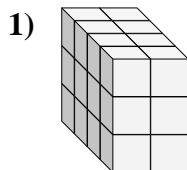
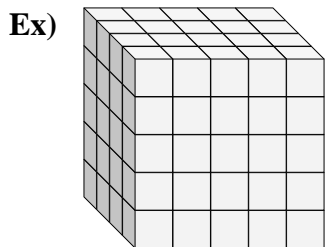
7. 4 5 3 60

8. 5 3 3 45

9. 5 4 2 40



Find the length, width and height of the rectangular prism. Then find the volume.



Answers  
Ex. 4 5 5 100

1. \_\_\_\_\_

2. \_\_\_\_\_

3. \_\_\_\_\_

4. \_\_\_\_\_

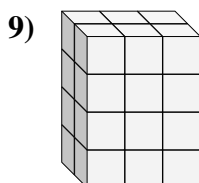
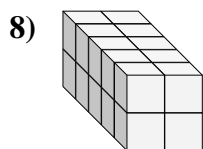
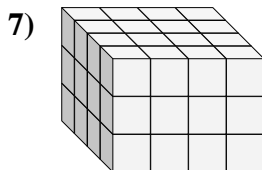
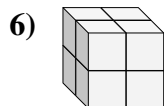
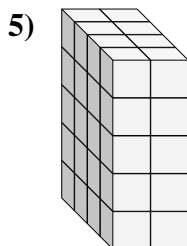
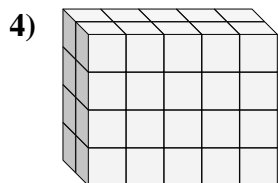
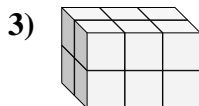
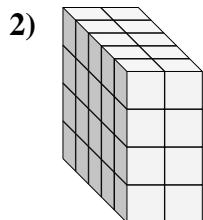
5. \_\_\_\_\_

6. \_\_\_\_\_

7. \_\_\_\_\_

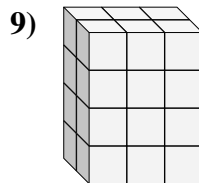
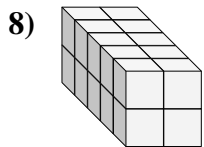
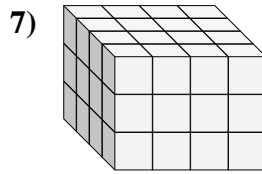
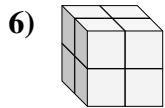
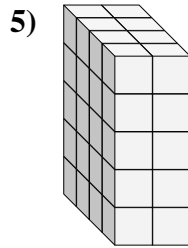
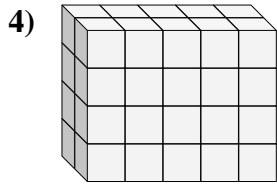
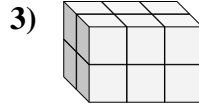
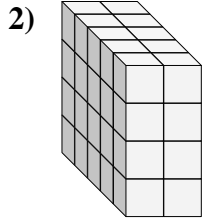
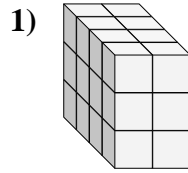
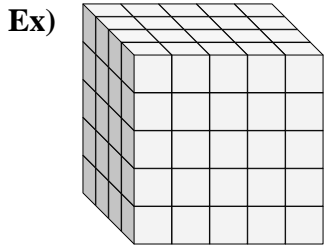
8. \_\_\_\_\_

9. \_\_\_\_\_





Find the length, width and height of the rectangular prism. Then find the volume.



Answers

Ex. 4 5 5 100

1. 4 2 3 24

2. 5 2 4 40

3. 2 3 2 12

4. 2 5 4 40

5. 4 2 5 40

6. 2 2 2 8

7. 4 4 3 48

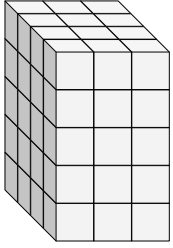
8. 5 2 2 20

9. 2 3 4 24

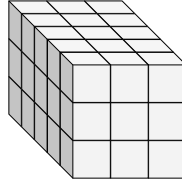


Find the length, width and height of the rectangular prism. Then find the volume.

Ex)



1)



Answers

Ex. 4 3 5 60

1. \_\_\_\_\_

2. \_\_\_\_\_

3. \_\_\_\_\_

4. \_\_\_\_\_

5. \_\_\_\_\_

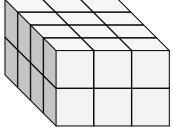
6. \_\_\_\_\_

7. \_\_\_\_\_

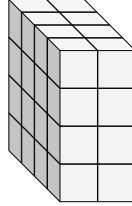
8. \_\_\_\_\_

9. \_\_\_\_\_

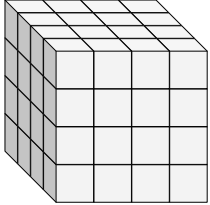
2)



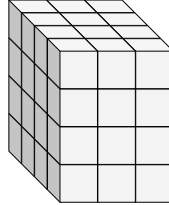
3)



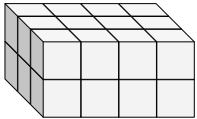
4)



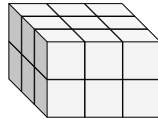
5)



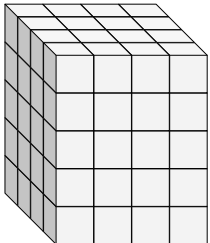
6)



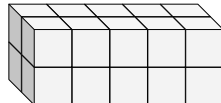
7)



8)



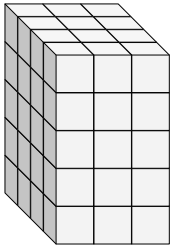
9)



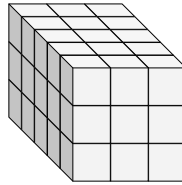


Find the length, width and height of the rectangular prism. Then find the volume.

Ex)



1)



Answers

Ex. 4 3 5 60

1. 5 3 3 45

2. 4 3 2 24

3. 4 2 4 32

4. 4 4 4 64

5. 4 3 4 48

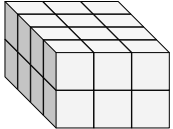
6. 3 4 2 24

7. 3 3 2 18

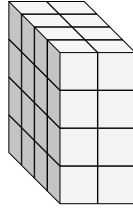
8. 4 4 5 80

9. 2 5 2 20

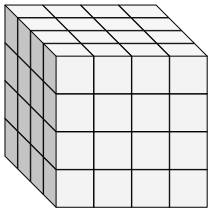
2)



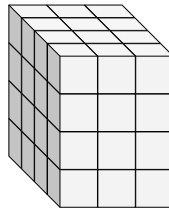
3)



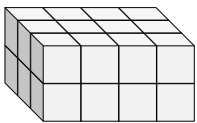
4)



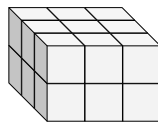
5)



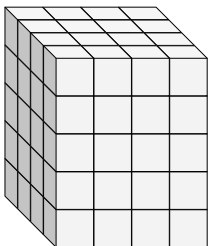
6)



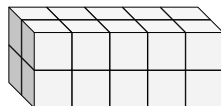
7)



8)



9)

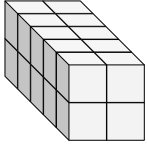




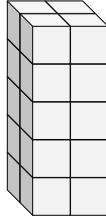


Find the length, width and height of the rectangular prism. Then find the volume.

Ex)



1)



Answers

Ex. 5 2 2 20

1. \_\_\_\_\_

2. \_\_\_\_\_

3. \_\_\_\_\_

4. \_\_\_\_\_

5. \_\_\_\_\_

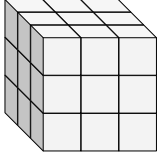
6. \_\_\_\_\_

7. \_\_\_\_\_

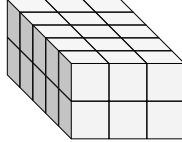
8. \_\_\_\_\_

9. \_\_\_\_\_

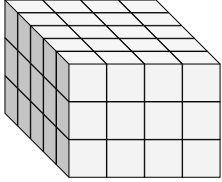
2)



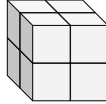
3)



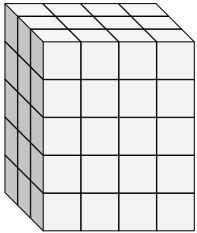
4)



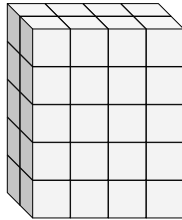
5)



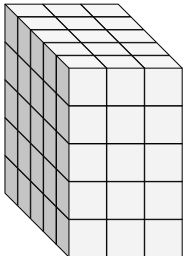
6)



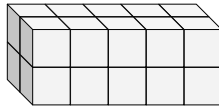
7)



8)

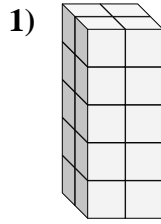
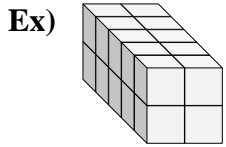


9)

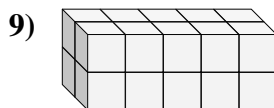
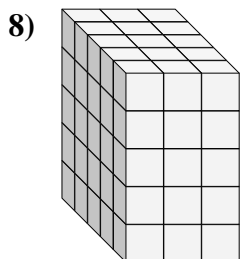
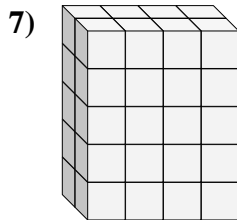
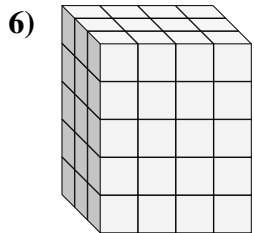
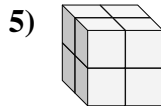
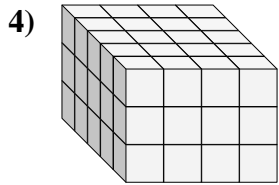
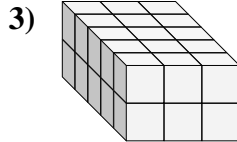
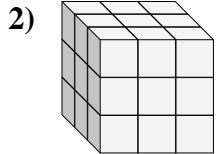




Find the length, width and height of the rectangular prism. Then find the volume.



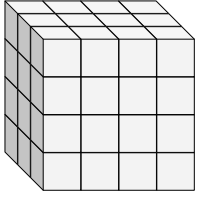
<u>Answers</u>				
Ex.	<u>5</u>	<u>2</u>	<u>2</u>	<u>20</u>
1.	<u>2</u>	<u>2</u>	<u>5</u>	<u>20</u>
2.	<u>3</u>	<u>3</u>	<u>3</u>	<u>27</u>
3.	<u>5</u>	<u>3</u>	<u>2</u>	<u>30</u>
4.	<u>5</u>	<u>4</u>	<u>3</u>	<u>60</u>
5.	<u>2</u>	<u>2</u>	<u>2</u>	<u>8</u>
6.	<u>3</u>	<u>4</u>	<u>5</u>	<u>60</u>
7.	<u>2</u>	<u>4</u>	<u>5</u>	<u>40</u>
8.	<u>5</u>	<u>3</u>	<u>5</u>	<u>75</u>
9.	<u>2</u>	<u>5</u>	<u>2</u>	<u>20</u>



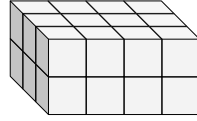


Find the length, width and height of the rectangular prism. Then find the volume.

Ex)



1)



Answers

Ex. 3 4 4 48

1. \_\_\_\_\_

2. \_\_\_\_\_

3. \_\_\_\_\_

4. \_\_\_\_\_

5. \_\_\_\_\_

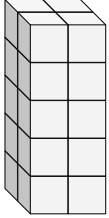
6. \_\_\_\_\_

7. \_\_\_\_\_

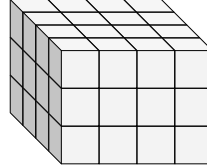
8. \_\_\_\_\_

9. \_\_\_\_\_

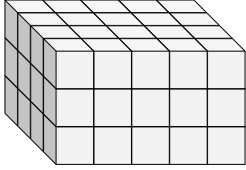
2)



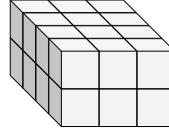
3)



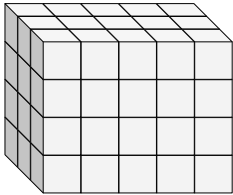
4)



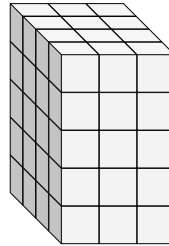
5)



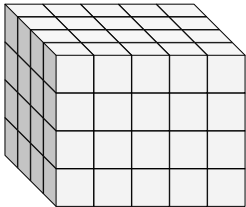
6)



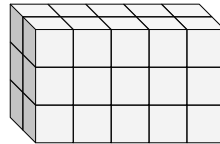
7)



8)

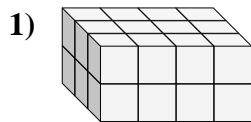
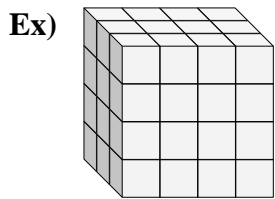


9)





Find the length, width and height of the rectangular prism. Then find the volume.



Answers  
Ex. 3 4 4 48

1. 3 4 2 24

2. 2 2 5 20

3. 4 4 3 48

4. 4 5 3 60

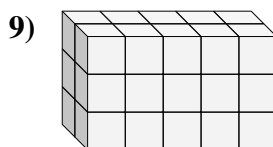
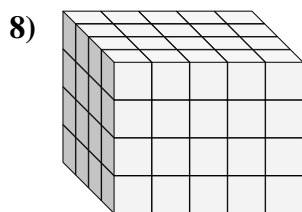
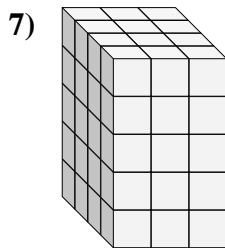
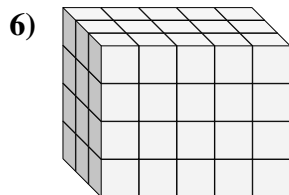
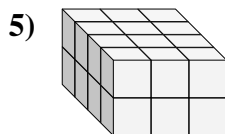
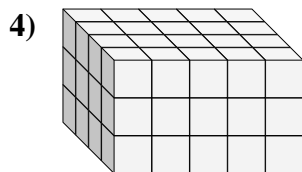
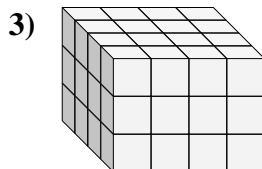
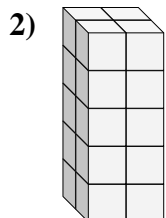
5. 4 3 2 24

6. 3 5 4 60

7. 4 3 5 60

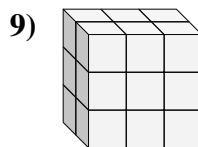
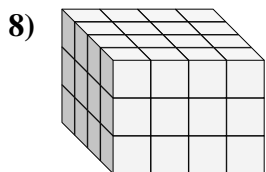
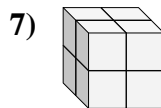
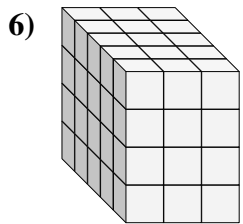
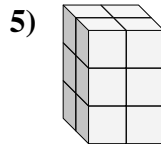
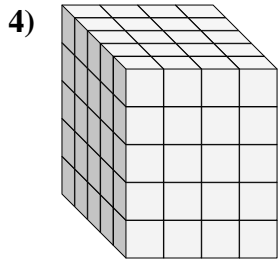
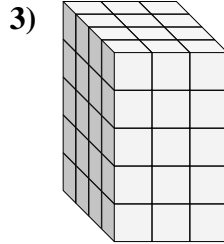
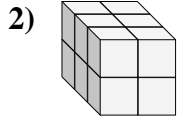
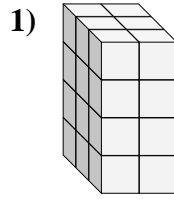
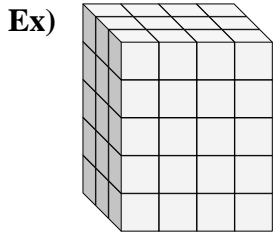
8. 4 5 4 80

9. 2 5 3 30





Find the length, width and height of the rectangular prism. Then find the volume.



Answers

Ex. 3 4 5 60

1. \_\_\_\_\_

2. \_\_\_\_\_

3. \_\_\_\_\_

4. \_\_\_\_\_

5. \_\_\_\_\_

6. \_\_\_\_\_

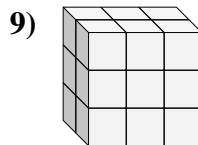
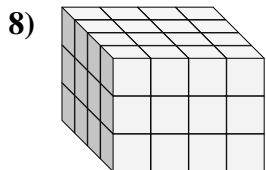
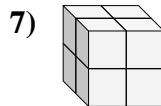
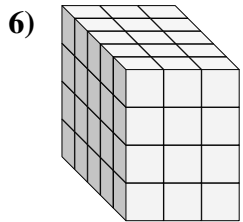
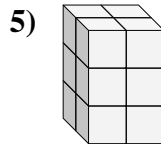
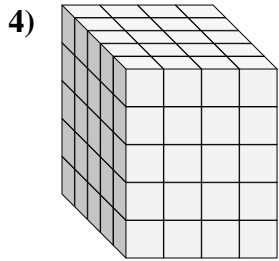
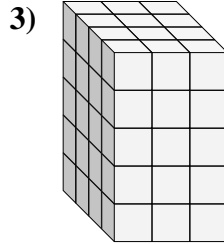
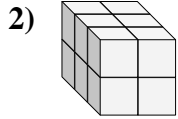
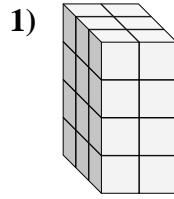
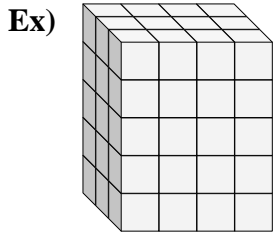
7. \_\_\_\_\_

8. \_\_\_\_\_

9. \_\_\_\_\_



Find the length, width and height of the rectangular prism. Then find the volume.



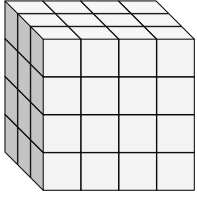
Answers

Ex.	<u>3</u>	<u>4</u>	<u>5</u>	<u>60</u>
1.	<u>3</u>	<u>2</u>	<u>4</u>	<u>24</u>
2.	<u>3</u>	<u>2</u>	<u>2</u>	<u>12</u>
3.	<u>4</u>	<u>3</u>	<u>5</u>	<u>60</u>
4.	<u>5</u>	<u>4</u>	<u>5</u>	<u>100</u>
5.	<u>2</u>	<u>2</u>	<u>3</u>	<u>12</u>
6.	<u>5</u>	<u>3</u>	<u>4</u>	<u>60</u>
7.	<u>2</u>	<u>2</u>	<u>2</u>	<u>8</u>
8.	<u>4</u>	<u>4</u>	<u>3</u>	<u>48</u>
9.	<u>2</u>	<u>3</u>	<u>3</u>	<u>18</u>

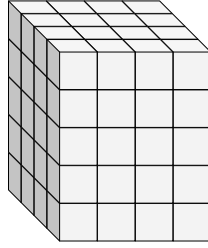


Find the length, width and height of the rectangular prism. Then find the volume.

Ex)



1)



Answers

Ex. 3 4 4 48

1. \_\_\_\_\_

2. \_\_\_\_\_

3. \_\_\_\_\_

4. \_\_\_\_\_

5. \_\_\_\_\_

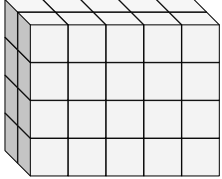
6. \_\_\_\_\_

7. \_\_\_\_\_

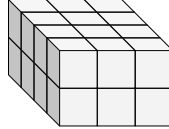
8. \_\_\_\_\_

9. \_\_\_\_\_

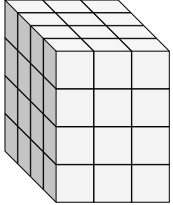
2)



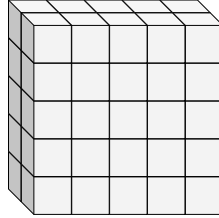
3)



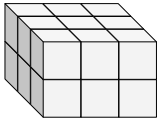
4)



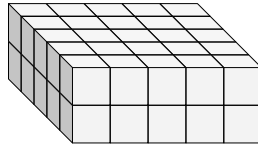
5)



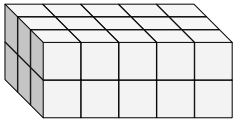
6)



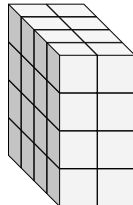
7)



8)

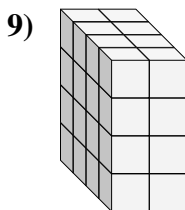
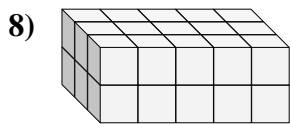
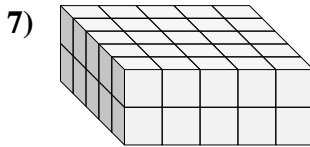
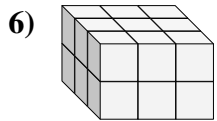
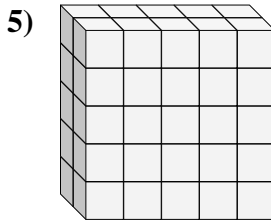
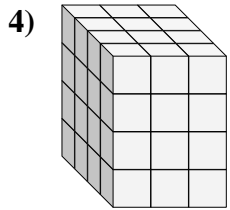
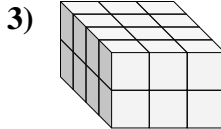
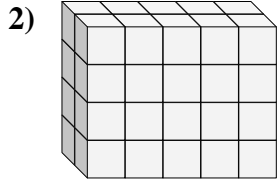
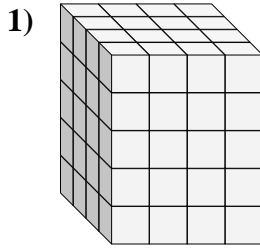
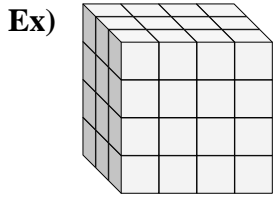


9)





Find the length, width and height of the rectangular prism. Then find the volume.



Answers

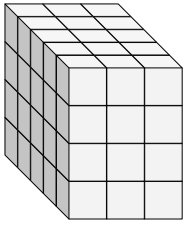
Ex.	<u>3</u>	<u>4</u>	<u>4</u>	<u>48</u>
1.	<u>4</u>	<u>4</u>	<u>5</u>	<u>80</u>
2.	<u>2</u>	<u>5</u>	<u>4</u>	<u>40</u>
3.	<u>4</u>	<u>3</u>	<u>2</u>	<u>24</u>
4.	<u>4</u>	<u>3</u>	<u>4</u>	<u>48</u>
5.	<u>2</u>	<u>5</u>	<u>5</u>	<u>50</u>
6.	<u>3</u>	<u>3</u>	<u>2</u>	<u>18</u>
7.	<u>5</u>	<u>5</u>	<u>2</u>	<u>50</u>
8.	<u>3</u>	<u>5</u>	<u>2</u>	<u>30</u>
9.	<u>4</u>	<u>2</u>	<u>4</u>	<u>32</u>



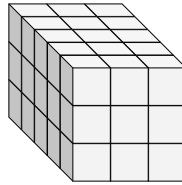


Find the length, width and height of the rectangular prism. Then find the volume.

Ex)



1)



Answers

Ex. 5 3 4 60

1. \_\_\_\_\_

2. \_\_\_\_\_

3. \_\_\_\_\_

4. \_\_\_\_\_

5. \_\_\_\_\_

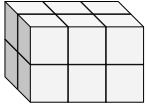
6. \_\_\_\_\_

7. \_\_\_\_\_

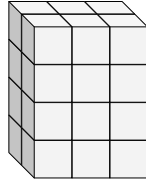
8. \_\_\_\_\_

9. \_\_\_\_\_

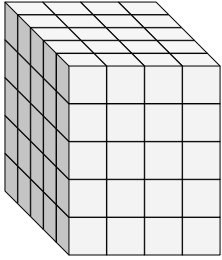
2)



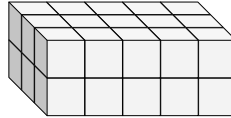
3)



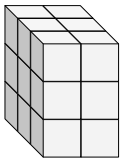
4)



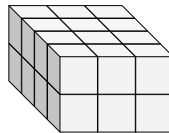
5)



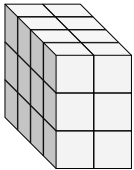
6)



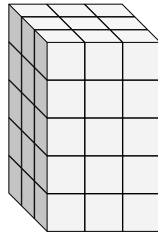
7)



8)

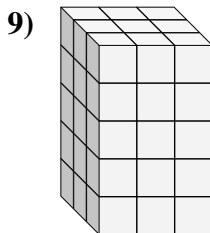
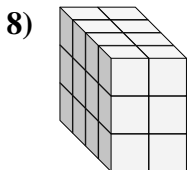
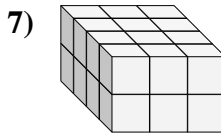
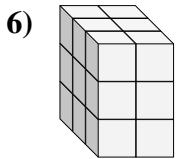
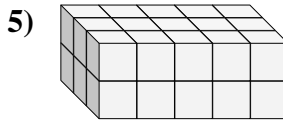
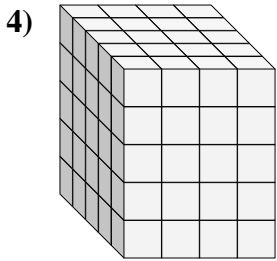
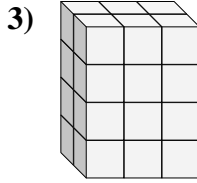
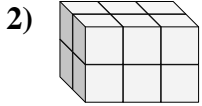
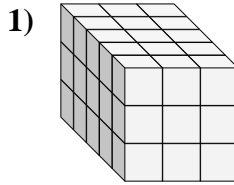
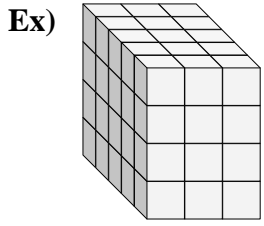


9)





Find the length, width and height of the rectangular prism. Then find the volume.



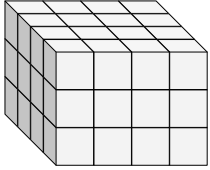
Answers

Ex.	<u>5</u>	<u>3</u>	<u>4</u>	<u>60</u>
1.	<u>5</u>	<u>3</u>	<u>3</u>	<u>45</u>
2.	<u>2</u>	<u>3</u>	<u>2</u>	<u>12</u>
3.	<u>2</u>	<u>3</u>	<u>4</u>	<u>24</u>
4.	<u>5</u>	<u>4</u>	<u>5</u>	<u>100</u>
5.	<u>3</u>	<u>5</u>	<u>2</u>	<u>30</u>
6.	<u>3</u>	<u>2</u>	<u>3</u>	<u>18</u>
7.	<u>4</u>	<u>3</u>	<u>2</u>	<u>24</u>
8.	<u>4</u>	<u>2</u>	<u>3</u>	<u>24</u>
9.	<u>3</u>	<u>3</u>	<u>5</u>	<u>45</u>

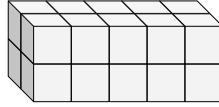


Find the length, width and height of the rectangular prism. Then find the volume.

Ex)



1)



Answers

Ex. 4 4 3 48

1. \_\_\_\_\_

2. \_\_\_\_\_

3. \_\_\_\_\_

4. \_\_\_\_\_

5. \_\_\_\_\_

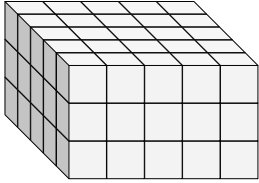
6. \_\_\_\_\_

7. \_\_\_\_\_

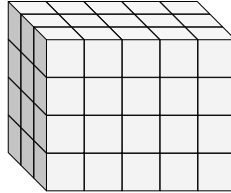
8. \_\_\_\_\_

9. \_\_\_\_\_

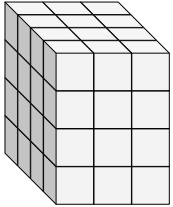
2)



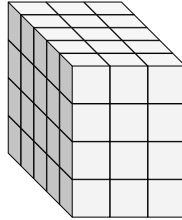
3)



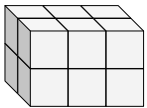
4)



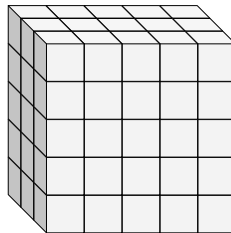
5)



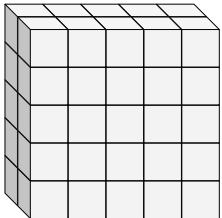
6)



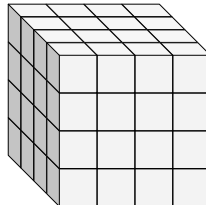
7)



8)

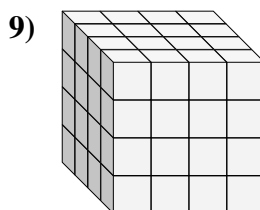
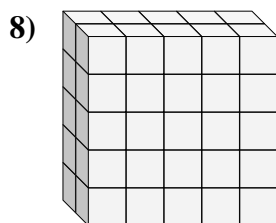
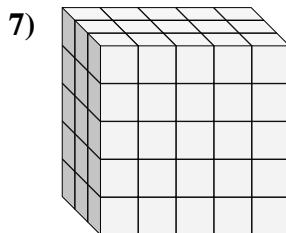
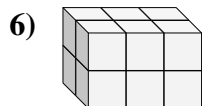
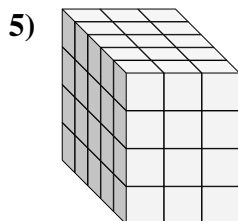
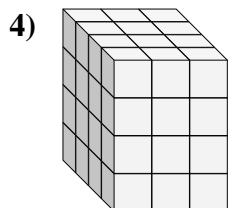
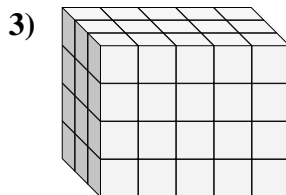
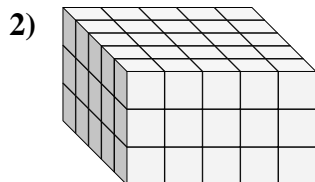
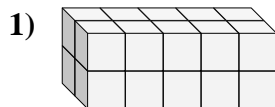
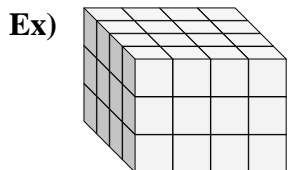


9)





Find the length, width and height of the rectangular prism. Then find the volume.



Answers

Ex. 4 4 3 48

1. 2 5 2 20

2. 5 5 3 75

3. 3 5 4 60

4. 4 3 4 48

5. 5 3 4 60

6. 2 3 2 12

7. 3 5 5 75

8. 2 5 5 50

9. 4 4 4 64